

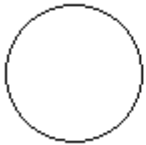
TAKO PRETEČE LETO

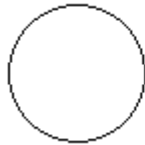
1. Znaš pravilno določiti časovne enote? Pomagaj si s koledarjem in uro!

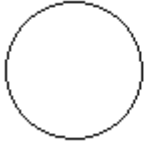
Dan ima ur. Mesec ima tedne. Ura ima minut.

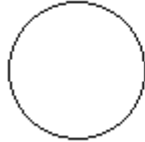
Teden ima dni. Leto ima mesecev.

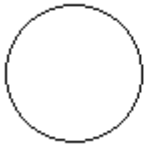
2. Dopolni imena mesecev. Izpiši s koledarja, koliko dni ima vsak mesec!

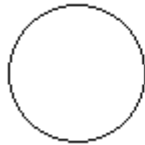


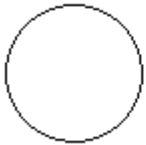


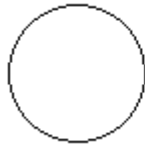


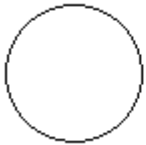


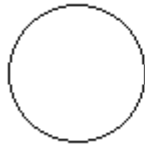


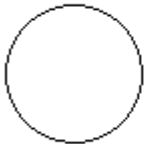


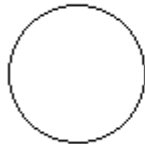












3. Kateri je tvoj najljubši mesec? _____

4. Letni časi so: _____, _____,

_____ in _____.

5. Ilustriraj tvoj najljubši letni čas.

6. Veš, kdaj se to dogaja?

- Sankamo se: _____
- Praznujemo dan mamic: _____
- Cvetijo vijolice: _____
- Imamo poletne počitnice: _____
- Dozorijo češnje: _____
- Trgatev: _____
- Praznujemo dan dela: _____
- Listje odpada: _____
- Obisk dedka mraza: _____
- Začne se novo leto: _____
- Se kopamo: _____
- Dan spomina na mrtve: _____

7. Kateri mesec je:

- 10. mesec? _____
- 8. mesec? _____
- 5. mesec? _____

8. Kateri mesec je pred septembrom? _____

9. Kateri mesec je za novembrom? _____

10. Kateri mesec je med aprilom in junijem? _____